






Summer Count and Graph Answers



| | | | | |
|---|---|---|--|---|
| 7 | | | | |
| 6 | | | | |
| 5 | | | | |
| 4 | | | | |
| 3 | | | | |
| 2 | | | | |
| 1 | | | | |
| |  |  |  |  |

1. How many of each summer picture did you count?

5 suns

6 balls

4 bikes


7 trees



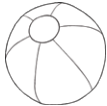

2. How many balls and bikes did you count in total? **10**

3. How many more trees than suns did you count? **2**

4. How many suns, trees, and bikes were there total? **16**

Summer Count and Graph



| | | | | |
|---|---|---|---|---|
| 7 | | | | |
| 6 | | | | |
| 5 | | | | |
| 4 | | | | |
| 3 | | | | |
| 2 | | | | |
| 1 | | | | |
| |  |  |  |  |

Summer Count and Graph Questions

① How many of each summer picture did you count?

_____ suns

_____ balls

_____ bikes


_____ trees

② How many balls and bikes did you count in total?

③ How many more trees than suns did you count?

④ How many suns, trees, and bikes were there total?

Summer Count and Graph



| | | | | |
|---|---|---|---|---|
| 7 | | | | |
| 6 | | | | |
| 5 | | | | |
| 4 | | | | |
| 3 | | | | |
| 2 | | | | |
| 1 | | | | |
| |  |  |  |  |

Summer Count and Graph Questions

1. How many of each summer picture did you count?

_____ suns

_____ balls

_____ bikes

_____ trees

2. How many balls and bikes did you count in total?

3. How many more trees than suns did you count?

4. How many suns, trees, and bikes were there total?